

Name _____

Second Grade

Snow

Day

Work

Day #3

Walnut Ridge Elementary

Alternative Method of Instruction Verification Form

Day 1 _____ **Day 2** _____ **Day 3** **Day 4** _____ **Day 5** _____

This form certifies that your child completed work for the designated day. This will allow your child to receive attendance credit for this day. In the event it is not completed, your child will receive an unexcused absence.

My child, _____ completed all work assigned for Day _____.

My child also worked on the following website:
_____.

Parent's Signature _____ **Date** _____

Bridges to Remember

Read to find out what is special about these bridges.


¹ Some people do not like to drive across bridges. They look straight ahead and try to hold their breath until they get to the other side. Good luck if those people are driving in Louisiana. There is a 24-mile-long bridge there! It takes about half an hour to get across.

² If you like to look way, way down when you cross a bridge, you should go to Colorado.

A bridge there stands more than a thousand feet above a river. A 75-story building could fit under that bridge!

³ If you do not like to look down, get in the middle lane of a bridge in Australia. It has eight lanes for cars, two train tracks, a bike path, and a sidewalk.

⁴ Finally, if you like crowds and bridges, go to India. A bridge there carries 100,000 cars and trucks every day, plus thousands of walkers.



1. How does the text help you understand how long a 24-mile-long bridge is?

2. How does the text help you understand how high the bridge in Colorado is?

3. If you do not like to look over the side of a bridge, why would the bridge in Australia be a good one to cross?

4. Why is the bridge in India a bridge to remember?

5. Name three things, other than cars, that cross bridges in the selection.




6. What do some people do if they are nervous on a bridge?

Vowel Pairs

Directions: Read each word in the box. Circle its vowel pair. Use each word to complete the riddle. Print the answers on the line.



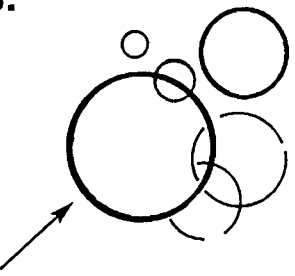
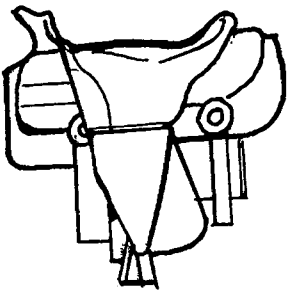







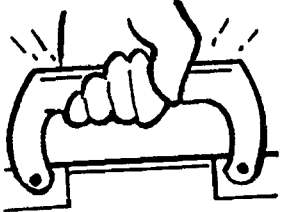
drain	feel	slow	boat	rainbow
toes	bleed	tail	green	neat
doe	dream	hay		

1. A dog can wag its _____.
2. A horse eats _____.
3. In a tub, water goes down a _____.
4. If you get cut, you will _____.
5. When you sleep, you _____.
6. Mix blue and yellow to get _____.
7. Use your fingers to _____.
8. It is not messy, but _____.
9. Each foot has five _____.
10. A female deer is a _____.
11. Something that floats is a _____.
12. After a storm, you might see a _____.
13. A turtle is not fast, but _____.



Words Ending in le

Directions: Say the name of each picture. Circle its name.

<p>1.</p>  <p>rattle rapper</p>	<p>2.</p>  <p>candle candy</p>	<p>3.</p>  <p>bottle bubble</p>
<p>4.</p>  <p>sadly saddle</p>	<p>5.</p>  <p>bottle bother</p>	<p>6.</p>  <p>castle cattle</p>
<p>7.</p>  <p>middle mitten</p>	<p>8.</p>  <p>nook noodles</p>	<p>9.</p>  <p>beagle better</p>
<p>10.</p>  <p>ladder ladle</p>	<p>11.</p>  <p>castle cattle</p>	<p>12.</p>  <p>handle happy</p>

Name _____

2-Digit Addition
No Regrouping

7

$$\begin{array}{r} 25 \\ + 63 \\ \hline \end{array}$$

$$\begin{array}{r} 51 \\ + 14 \\ \hline \end{array}$$

$$\begin{array}{r} 62 \\ + 17 \\ \hline \end{array}$$

$$\begin{array}{r} 12 \\ + 63 \\ \hline \end{array}$$

$$\begin{array}{r} 34 \\ + 53 \\ \hline \end{array}$$

$$\begin{array}{r} 50 \\ + 12 \\ \hline \end{array}$$

$$\begin{array}{r} 42 \\ + 26 \\ \hline \end{array}$$

$$\begin{array}{r} 11 \\ + 25 \\ \hline \end{array}$$

$$\begin{array}{r} 74 \\ + 15 \\ \hline \end{array}$$

$$\begin{array}{r} 32 \\ + 37 \\ \hline \end{array}$$


$$\begin{array}{r} 61 \\ + 21 \\ \hline \end{array}$$

$$\begin{array}{r} 86 \\ + 12 \\ \hline \end{array}$$

$$\begin{array}{r} 40 \\ + 35 \\ \hline \end{array}$$

$$\begin{array}{r} 75 \\ + 14 \\ \hline \end{array}$$

$$\begin{array}{r} 27 \\ + 31 \\ \hline \end{array}$$



Time: _____

Score: _____ / _____

1. The first part of the document discusses the importance of maintaining accurate records of all transactions and activities. It emphasizes that this is crucial for ensuring transparency and accountability in the organization's operations.

2. The second part of the document outlines the various methods and tools used to collect and analyze data. It highlights the need for consistent data collection procedures and the use of advanced analytical techniques to derive meaningful insights from the data.

3. The third part of the document focuses on the implementation of data-driven decision-making processes. It discusses how to integrate data analysis into the organization's strategic planning and operational decision-making, ensuring that decisions are based on solid evidence and data.

4. The fourth part of the document addresses the challenges and risks associated with data management and analysis. It identifies common pitfalls such as data quality issues, privacy concerns, and the potential for misinterpretation of data, and provides strategies to mitigate these risks.

5. The final part of the document concludes by summarizing the key findings and recommendations. It reiterates the importance of a data-driven approach and provides a clear roadmap for the organization to follow in order to maximize the value of its data and achieve its strategic goals.

Name _____ Date _____

Two-Digit Subtraction

Total Problems: 27
Problems Correct: _____

Solve each problem.

Use Your Subtraction Tools!

1. $\begin{array}{r} 61 \\ -41 \\ \hline \end{array}$

2. $\begin{array}{r} 39 \\ -26 \\ \hline \end{array}$

3. $\begin{array}{r} 85 \\ -43 \\ \hline \end{array}$

4. $\begin{array}{r} 56 \\ -31 \\ \hline \end{array}$

5. $\begin{array}{r} 47 \\ -17 \\ \hline \end{array}$

6. $\begin{array}{r} 87 \\ -45 \\ \hline \end{array}$

7. $\begin{array}{r} 67 \\ -52 \\ \hline \end{array}$

8. $\begin{array}{r} 78 \\ -33 \\ \hline \end{array}$

9. $\begin{array}{r} 69 \\ -46 \\ \hline \end{array}$

10. $\begin{array}{r} 96 \\ -21 \\ \hline \end{array}$

11. $\begin{array}{r} 94 \\ -71 \\ \hline \end{array}$

12. $\begin{array}{r} 40 \\ -20 \\ \hline \end{array}$

13. $\begin{array}{r} 70 \\ -20 \\ \hline \end{array}$

14. $\begin{array}{r} 98 \\ -31 \\ \hline \end{array}$

15. $\begin{array}{r} 58 \\ -18 \\ \hline \end{array}$

16. $\begin{array}{r} 38 \\ -15 \\ \hline \end{array}$

17. $\begin{array}{r} 65 \\ -12 \\ \hline \end{array}$

18. $\begin{array}{r} 88 \\ -62 \\ \hline \end{array}$

19. $\begin{array}{r} 26 \\ -24 \\ \hline \end{array}$

20. $\begin{array}{r} 70 \\ -20 \\ \hline \end{array}$

21. $\begin{array}{r} 82 \\ -51 \\ \hline \end{array}$

22. $\begin{array}{r} 62 \\ -20 \\ \hline \end{array}$

23. $\begin{array}{r} 98 \\ -34 \\ \hline \end{array}$

24. $\begin{array}{r} 88 \\ -12 \\ \hline \end{array}$

25. $\begin{array}{r} 45 \\ -35 \\ \hline \end{array}$

26. $\begin{array}{r} 67 \\ -45 \\ \hline \end{array}$

27. $\begin{array}{r} 19 \\ -15 \\ \hline \end{array}$

